

1. How long is this pencil

(a) in centimetres?

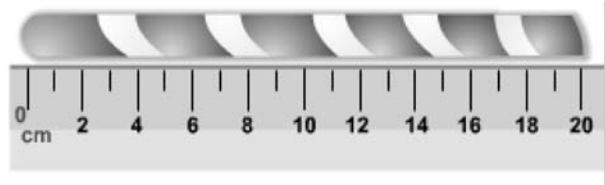
(b) in metres?



2. How long is this stick of rock

(a) in centimetres?

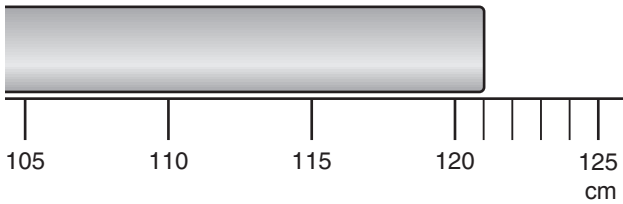
(b) in metres?



3. How long is this piece of ribbon

(a) in centimetres?

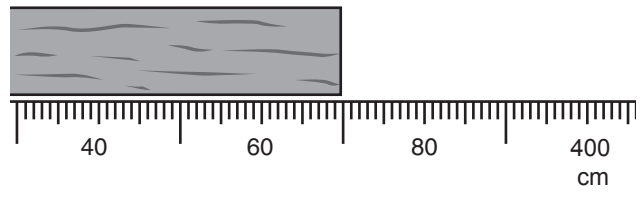
(b) in metres?



4. How long is this piece of wood

(a) in centimetres?

(b) in metres?



5. What is 50 cm as a decimal fraction of a metre?

6. Use decimals to write 157 cm in metres.

7. How would you write 45 cm as a decimal fraction of a metre?

8. What is 7.35 m in centimetres?

9. (a) Write 2.07 m in centimetres.

(b) Write 2.7 m in centimetres.

10. 2 metres of sticky tape is cut into 4 equal pieces.

How long is each piece?

Write the answer as many different ways as you can.