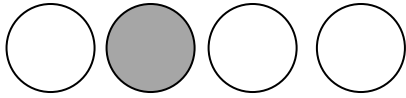
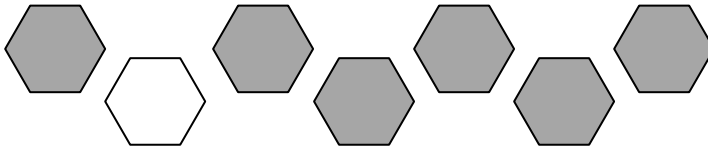





1. What fraction of this set is shaded in?




2. a. What fraction of this set is shaded in?
 b. What fraction is NOT shaded in?



3. The set below contains three types of square: stripy , blank  and spotty 

Which type of square is a. $\frac{1}{8}$ of the set? b. $\frac{3}{8}$ of the set?



4. Draw a set of objects that shows $\frac{1}{3}$.

5. Draw a set of objects that shows $\frac{1}{10}$.